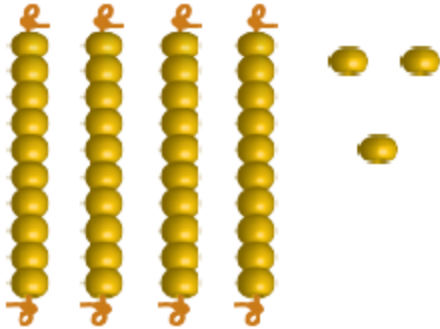


Asha Students Achievement Test 2017 – 18

Student Name		Class	2
School Name		Date	

1. Count the beads and write the numeral.



Numeral _____

2. Write in expanded form:

74 = _____ Tens and _____ Ones




3. Compare the numbers and write < or = or > in the box:

i) 35 26

ii) 28 52

iii) 17 17

4. From the following tick (✓) the circle:



5. Write the missing numbers:

81		83		85			88		
----	--	----	--	----	--	--	----	--	--

6. Add:

	T	O
+	6	3
	1	2

$$\begin{array}{r} 49 \\ + 15 \\ \hline \\ \hline \end{array}$$

7. Fill in the blanks:

$9 + 0 = \underline{\quad}$

$2 + \underline{\quad} = 5$

$15 - 15 = \underline{\quad}$

8. Subtract:

i)



$$\square - \square = \square$$

ii)

	T	O
	6	3
—	1	2

iii)

$$\begin{array}{r} 72 \\ - 56 \\ \hline \\ \hline \end{array}$$

9. Write the greatest and smallest numbers in the following.

48, 26, 15, 96, 91, 84

Greatest number: _____

Smallest number: _____